

# SVARARK

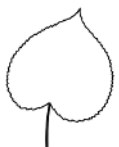












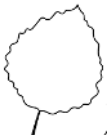






POST 1: LØS GÅDEN.

 =       =       =

POST 2: LAV TALPYRAMIDERNE.

			14				18		<del>20</del>
		6				8		11	
3	4				4		2		7

POST 3: FARV BRØKEN.

$$\frac{1}{4}$$

$$\frac{3}{6}$$

$$\frac{1}{2}$$




# SVARARK

POST 4: HVOR MEGET HAR DET REGNET?

+ + + + + + + =



---

POST 5: SKRIV KOORDINATERNE.

 ( , )  ( , )  ( , )

 ( , )  ( , )  ( , )

POST 6: SKRIV 4 SÆTNINGER.



# SVARARK

POST 7: AFLÆS KLOKKEN.



POST 8: LØS DET MAGISKE KVADRAT.

	14	7	
15		10	6
			4
8	12	1	

# SVARARK

**POST 9: HVOR LANGT LØBER DE I ALT?**

---

**POST 10: SKRIV 4 FORSKELLIGE REGNESTYKKER.**

---

= 46

---

= 46

---

= 46

---

= 46