

# SVARARK

## POST 1: LØS GÅDEN.



= \_\_\_\_\_



= \_\_\_\_\_



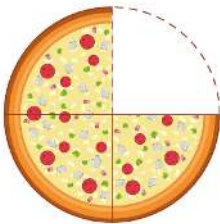
= \_\_\_\_\_

## POST 2: LÆS HISTORIEN OG SVAR.

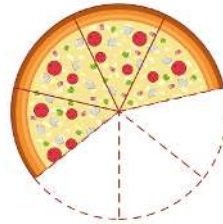
Hvor mange dyr spiser Charlotte i alt?

\_\_\_\_\_

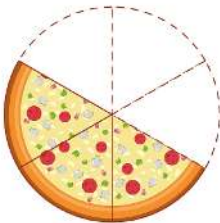
## POST 3: SKRIV BRØKEN.



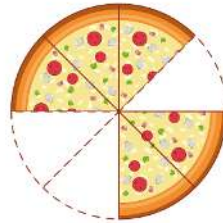
\_\_\_\_\_



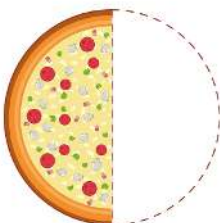
\_\_\_\_\_



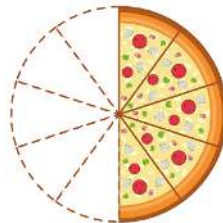
\_\_\_\_\_



\_\_\_\_\_



\_\_\_\_\_



\_\_\_\_\_

# SVARARK

POST 4: SKRIV 3 REGNESTYKKER.

---

 $= 58$

---

 $= 58$

---

 $= 58$

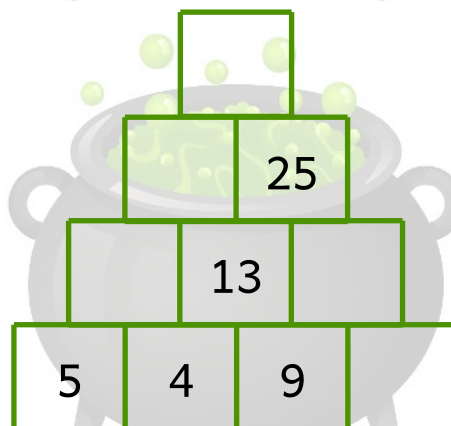
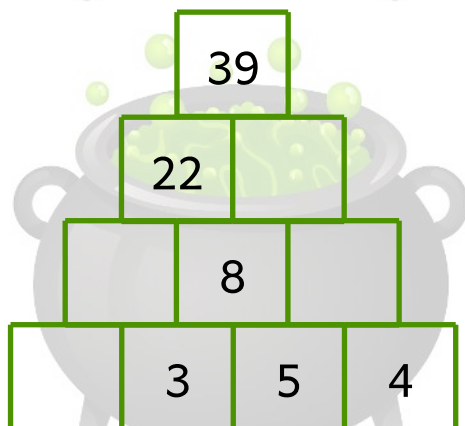
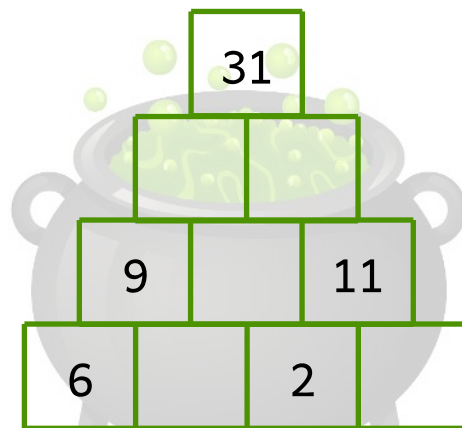
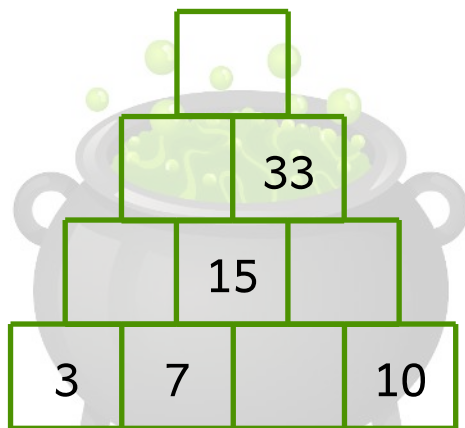
POST 5: SKRIV KOORDINATERNE.

 (   ,   )  (   ,   )  (   ,   )

 (   ,   )  (   ,   )  (   ,   )

# SVARARK




## POST 6: UDFYLD FELTERNE.



## POST 7: SVAR PÅ SPØRGSMÅLENE.

Hvor mange  har de fået tilsammen? \_\_\_\_\_

Hvem har fået mest slik? Hvor mange stykker? \_\_\_\_\_

Hvilket stykke slik har de fået flest af?     

# SVARARK

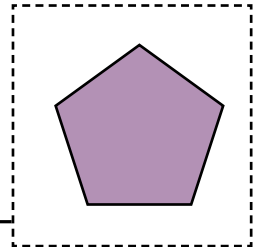
## POST 8: HVOR LANGT ER DER?

	sort rute	blå rute	rød rute	grøn rute	gul rute	i alt
meter						3,5 km

## POST 9: SKRIV SÆTNINGER.

1

---



2

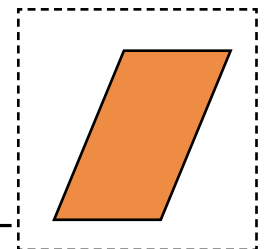
---

3

---

1

---



2

---

3

---

# SVARARK

POST 10: LAV TALRÆKKERNE FÆRDIG.

